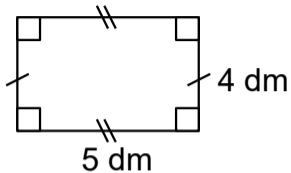
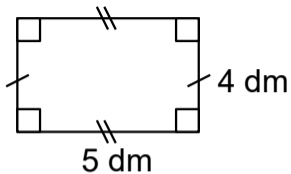


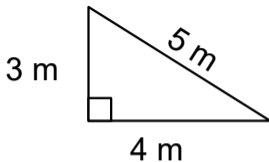
Questions flash :
périmètres & aires



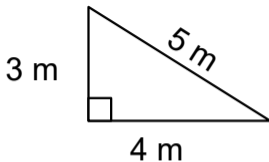
Aire du rectangle ?



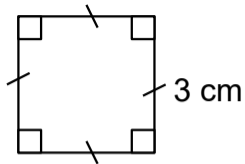
$$\text{Aire : } 4 \times 5 = 20 \text{ dm}^2$$



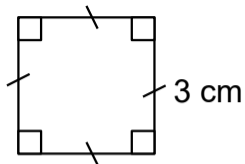
Périmètre du triangle ?



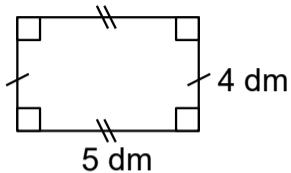
Périmètre : $3 + 4 + 5 = 12 \text{ m}$



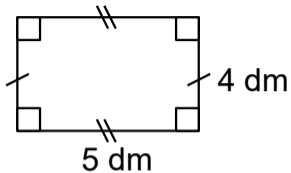
Aire du carré ?



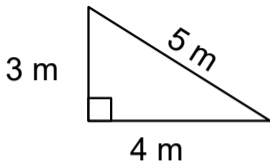
$$\text{Aire : } 3 \times 3 = 9 \text{ cm}^2$$



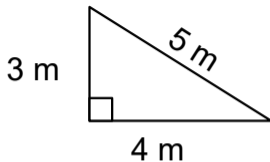
Périmètre du rectangle ?



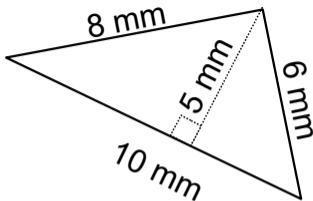
$$\text{Périmètre : } (2 \times 5) + (2 \times 4) = 18 \text{ dm}$$



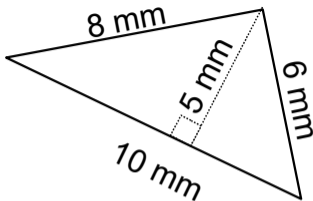
Aire du triangle ?



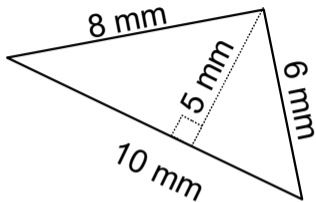
$$\text{Aire : } (3 \times 4) \div 2 = 6 \text{ m}^2$$



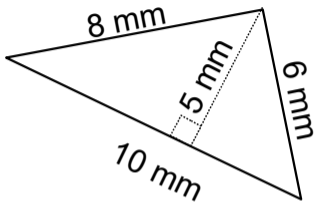
Périmètre du triangle ?



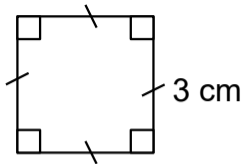
$$\text{Périmètre : } 10 + 8 + 6 = 24 \text{ mm}$$



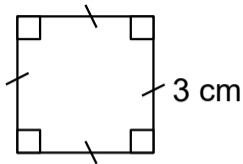
Aire du triangle ?



$$\text{Aire : } (10 \times 5) \div 2 = 25 \text{ mm}^2$$



périmètre du carré ?



$$\text{Périmètre} : 3 \times 4 = 12 \text{ cm}$$

