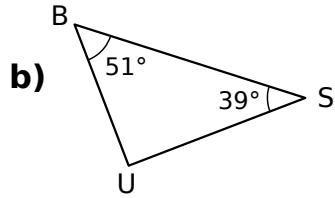
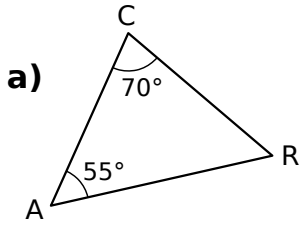
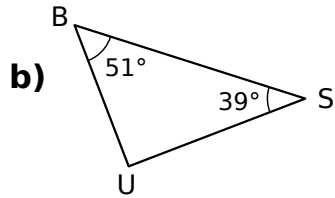
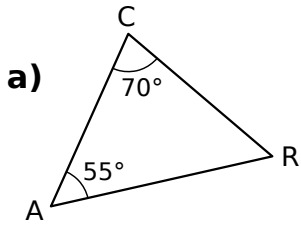


Exercice 6

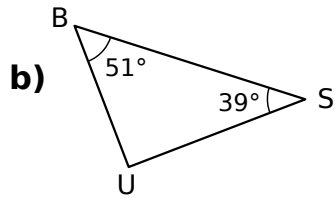
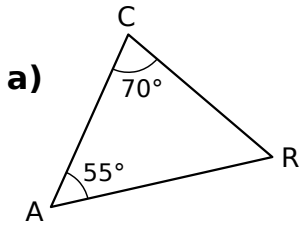
Donner, en justifiant, la nature des triangles :

**Exercice 6**

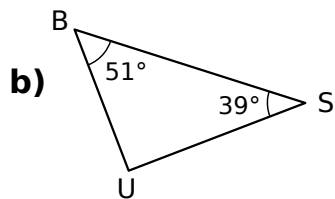
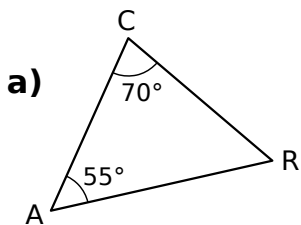
Donner, en justifiant, la nature des triangles :

**Exercice 6**

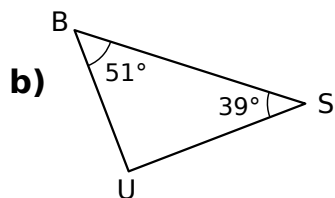
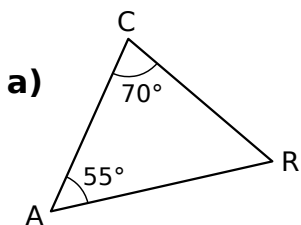
Donner, en justifiant, la nature des triangles :

**Exercice 6**

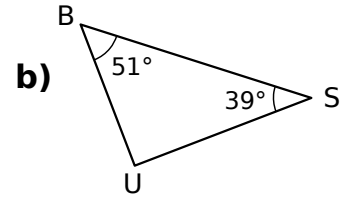
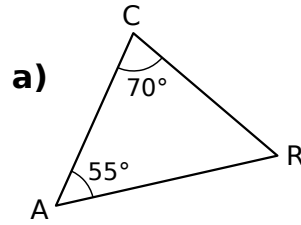
Donner, en justifiant, la nature des triangles :

**Exercice 6**

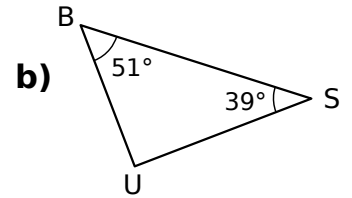
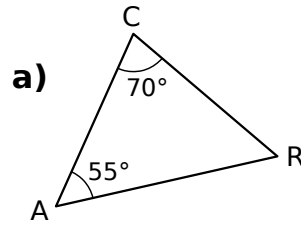
Donner, en justifiant, la nature des triangles :

**Exercice 6**

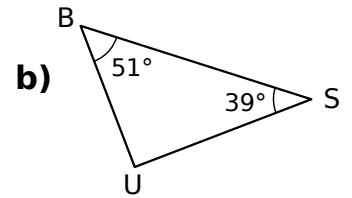
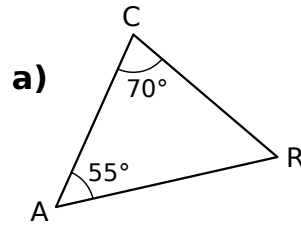
Donner, en justifiant, la nature des triangles :

**Exercice 6**

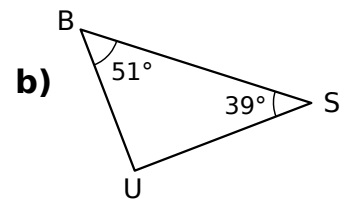
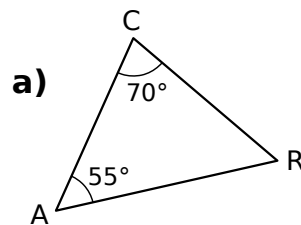
Donner, en justifiant, la nature des triangles :

**Exercice 6**

Donner, en justifiant, la nature des triangles :

**Exercice 6**

Donner, en justifiant, la nature des triangles :

**Exercice 6**

Donner, en justifiant, la nature des triangles :

